



Expressing Quantities

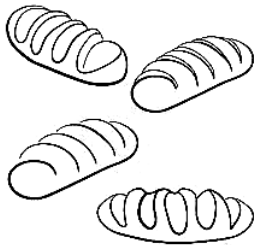
a) Label the pictures, as in the example:



a carton of milk











b) Match the proper amounts with the things listed below:

- | | |
|------------------|--------------|
| 1. a bar of | • bread |
| 2. a box of | • chocolates |
| 3. a bottle of | • chocolate |
| 4. a jar of | • sugar |
| 5. a tin of | • soup |
| 6. a slice of | • milk |
| 7. a packet of | • crisps |
| 8. a spoonful of | • toothpaste |
| 9. a loaf of | • ham |
| 10. a tube of | • jam |